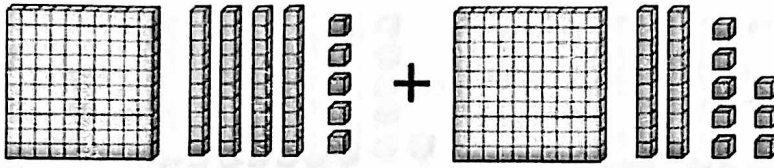


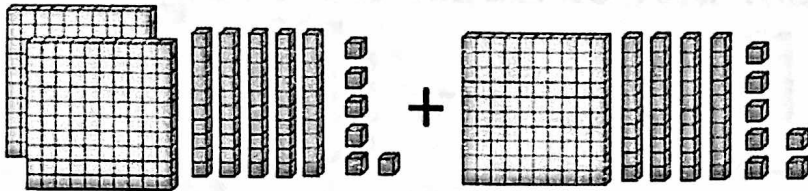
Use the model to find the sum.



- A. 2613 C. 263
B. 273 D. 236

Add & Subtract

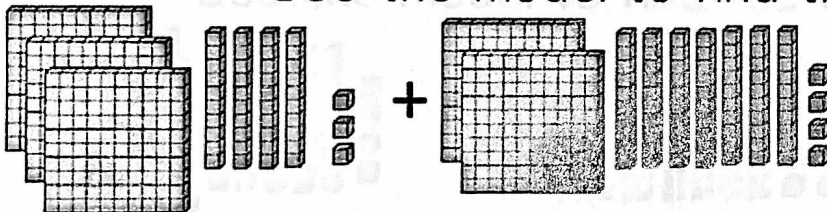
Use the model to find the sum.



- A. 393 C. 403
B. 3913 D. 413

Add & Subtract

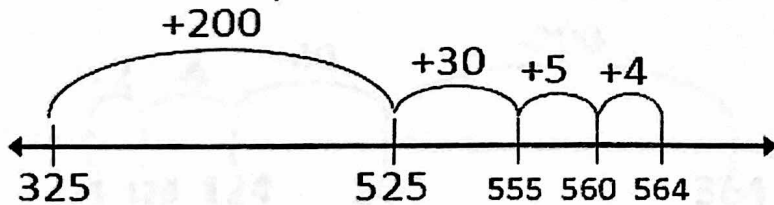
Use the model to find the sum.



- A. 617 C. 517
B. 5117 D. 607

Add & Subtract

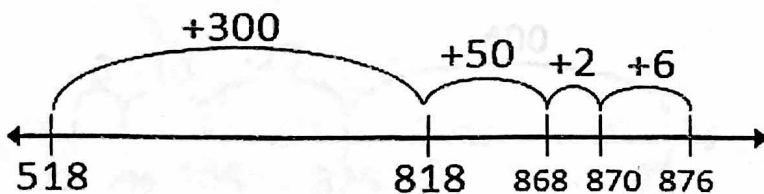
What equation does the model represent?



- A. $325 + 2354 = 564$
B. $325 - 239 = 564$
C. $564 + 325 = 239$
D. $325 + 239 = 564$

Add & Subtract

What equation does the model represent?



- A. $518 + 3526 = 876$
B. $518 + 358 = 876$
C. $518 - 358 = 876$
D. $876 + 518 = 358$

Add & Subtract