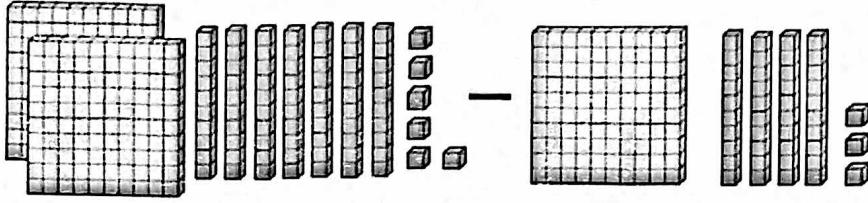


Use the model to find the difference.

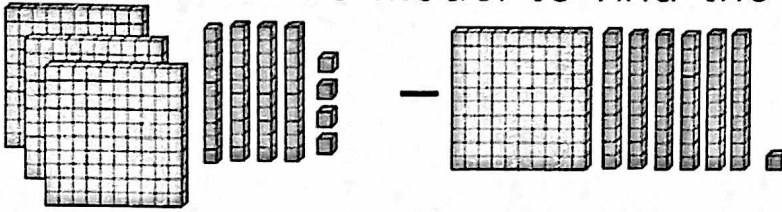


- A. 133 C. 136
B. 419 D. 139

Add & Subtract

6

Use the model to find the difference.

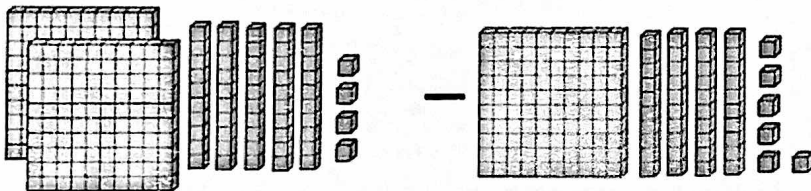


- A. 193 C. 183
B. 223 D. 203

Add & Subtract

7

Use the model to find the difference.

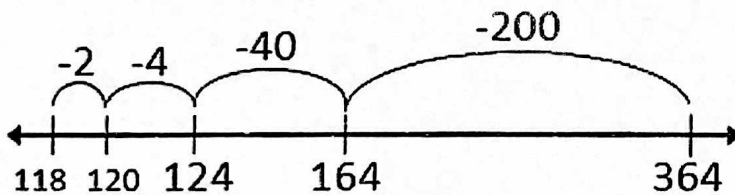


- A. 108 C. 208
B. 112 D. 118

Add & Subtract

8

What equation does the model represent?

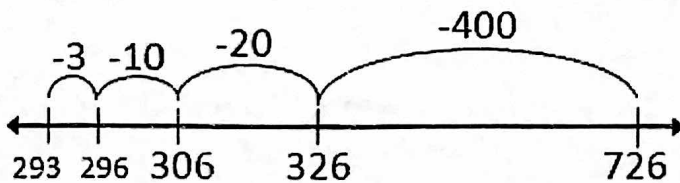


- A. $364 - 246 = 118$
B. $364 + 246 = 118$
C. $246 - 364 = 118$
D. $118 + 364 = 246$

Add & Subtract

9

What equation does the model represent?



- A. $726 + 433 = 293$
B. $726 - 4213 = 326$
C. $726 - 433 = 293$
D. $426 - 293 = 726$

Add & Subtract

10